



Superhero Measuring

How many cubes tall are the superheroes? Use your cubes to measure how tall the superheroes are. Write the number of cubes in the correct box.



cubes tall




cubes tall




Superhero Measuring

How many cubes tall are the superheroes? Use your cubes to measure how tall the superheroes are. Write the number of cubes in the correct box.



cubes tall



cubes tall

